

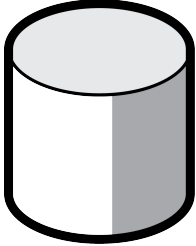


Accessing Prior Knowledge

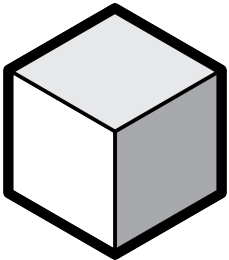
Name: _____ Date: _____

Two- and Three-Dimensional Figures

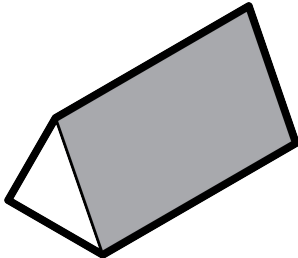
Match each of the three-dimensional figures to their correct geometrical name.



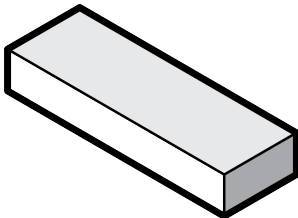
Cube




Sphere



**Triangular
prism**



Cylinder



**Rectangular
prism**